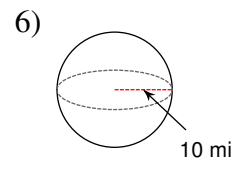
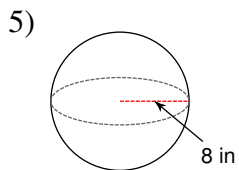
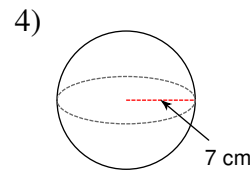
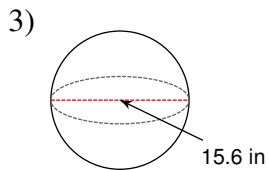
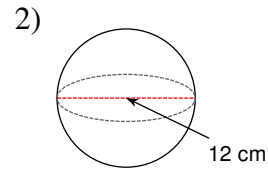
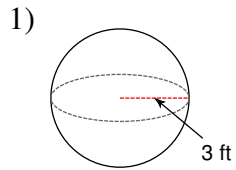


Spheres

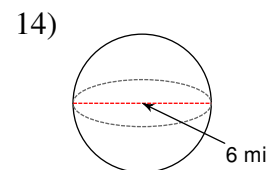
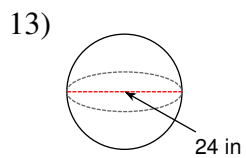
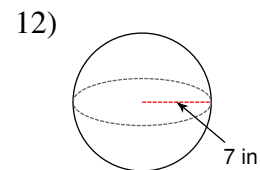
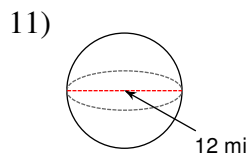
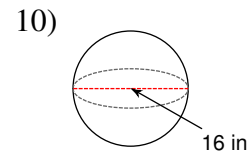
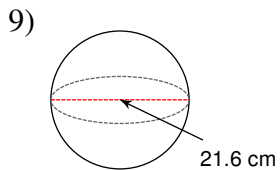
Find the surface area of each figure. Round your answers to the nearest tenth, if necessary.



7) A sphere with a diameter of 6.2 in.

8) A sphere with a radius of 10 mi.

Find the volume of each figure. Round your answers to the nearest tenth, if necessary.

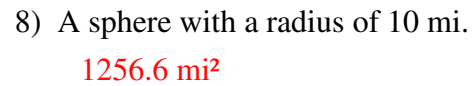
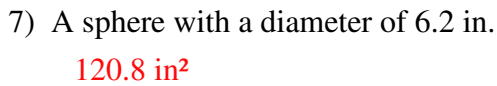
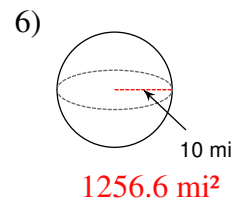
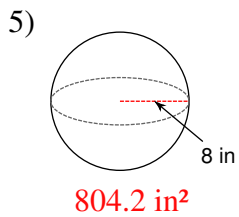
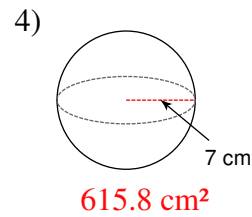
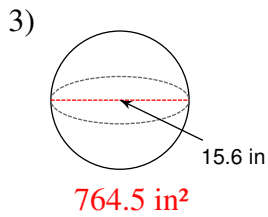
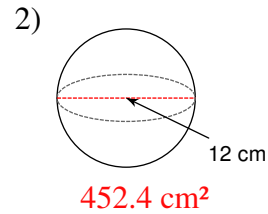
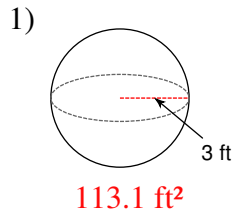


15) A sphere with a diameter of 2 m.

16) A sphere with a diameter of 10 ft.

Spheres

Find the surface area of each figure. Round your answers to the nearest tenth, if necessary.



Find the volume of each figure. Round your answers to the nearest tenth, if necessary.

